

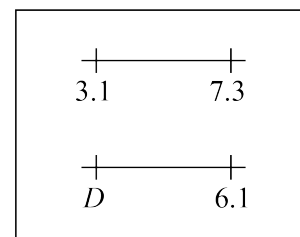
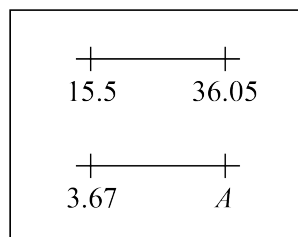
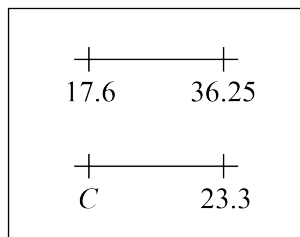
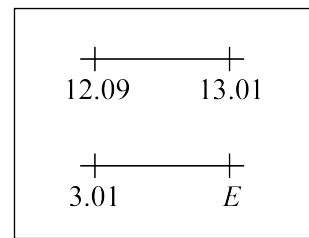
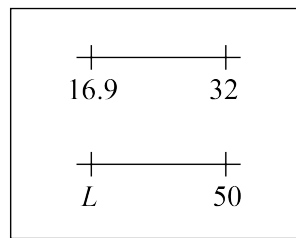
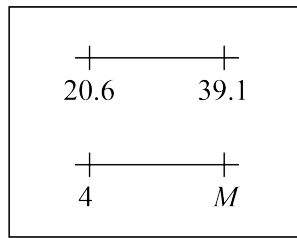
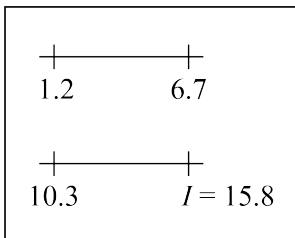


Problem of the Week

Problem B

Line Up These Letters!

Determine the number corresponding to each letter so that the two number lines in each box have the same range. The first letter has been done for you.



Then write the numbers in the table below, in order from least to greatest, along with their corresponding letters in the row below. The corresponding letters will spell a mathematical term!

Numbers				15.8			
Letters				I			